



# OUNDLE

School

2019 Academic Scholarship Paper

## Geography

Time allowed: **1 hour 30 minutes**

**Write all answers on A4 lined Paper.**

**Also needed:**

- 1:25 000 OS map extract of “Egremont, Cumbria”

**Instructions:**

- Write your name at the top of each separate page you write on.
- Clearly number every question that you answer;
- Answer the following:
  - All of Section A;
  - One question from Section B; (B1 OR B2)
  - One from Section C.
- The marks available for each question are shown in brackets; the length of each answer relate to the number of marks and this should guide you on how much time to spend on each.

**Information:**

- The total number of marks for this paper is **60**. Each section is weighted **equally**;
- Credit will be given for the use of examples, labelled maps and sketches/diagrams, where used appropriately.

## **Section A: Applied Map work & Skills**

You **must** answer all of Section A.

You **should** refer to the Map Key on the reverse of the map extract.

You may write on the map, if needed.

1. Study the map extract of Egremont and the surrounding area.  
(1:25,000 scale.)

(a) Identify the following:

- i) The river feature at grid reference 012,129 (1)
- ii) The spot height in grid square 05,13 (1)
- iii) The type of road that runs through the settlement of Wilton in 03,11 (1)
- iv) The type of vegetation in Lowther Park at 05,11 (1)
- v) One service that is found in both Cleator and Haile (1)
- vi) The name of the farm that is located 3km east of the information centre in Egremont. (1)
- vii) Estimate the area of the settlement of Thornhill (01,08) in square kilometers (1)

(b) Using map evidence, explain why there are few settlements to the north-east of the map extract. (4)

2. **Table A1** gives information about tourism on the Galapagos islands.

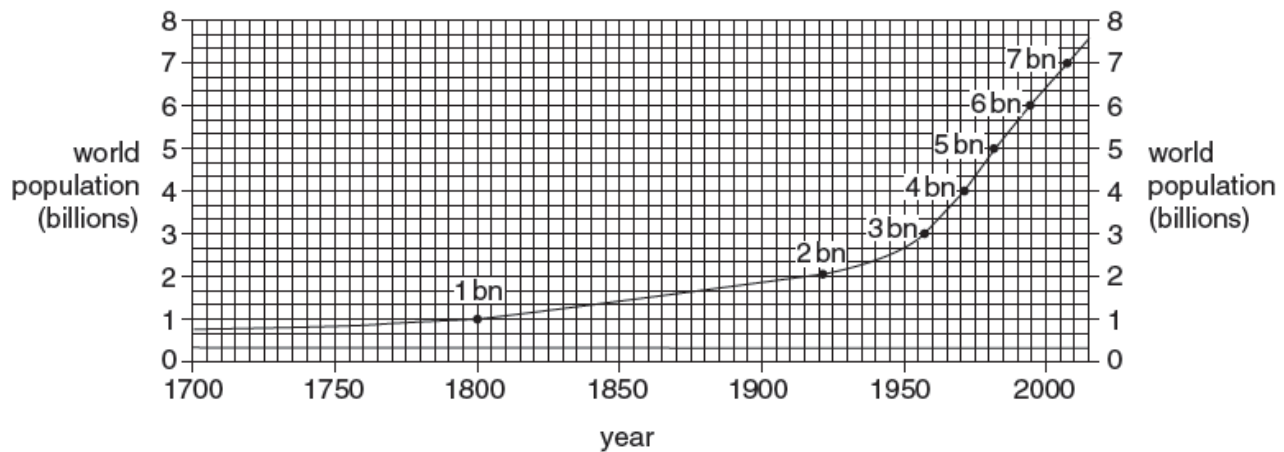
(a) Use **Table A1** to complete **Figure A2** on the one page answer sheet. Use the key provided. (2)

Spending by tourists	Percentage of the total spending
before arrival in the islands	64
travelling around the islands by boat	30
on services in ports on the islands	6

**Table A1**

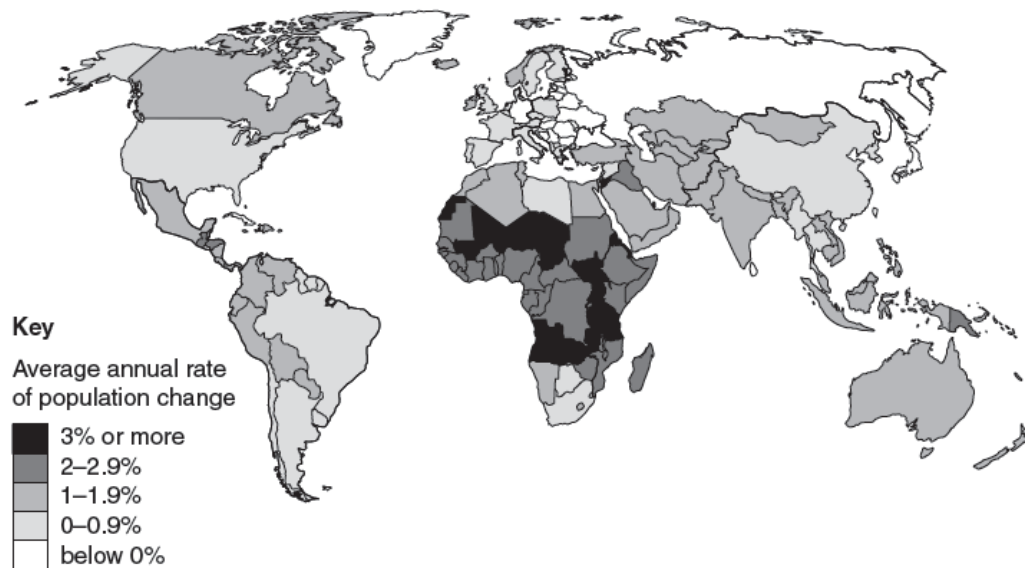
3. **Graph A3** shows the growth in world population from 1700.

- (a) Give the year when world population reached 2 billion. **(1)**
- (b) Describe the growth in world population **(2)**
- From 1700-1950
  - From 1950 to the present day



**Graph A3**

- (c) **Map A4** shows population change in different parts of the world.



**Map A4**

Describe the differences in population change:

- (i) Between Africa and South America; **(2)**
- (ii) Between Asia and North America. **(2)**

(Total marks for section A = **20 marks**)

## **Section B: Applied Physical and Human Geography**

Choose **one** question from this section (**either B1 or B2**)

---

### **Question B1 (Applied Physical Geography)**

Study **Figure B1** below which shows a river meander.



**Photograph B1**

- (a) Which process has led to the formation shown at X in **Photograph B1**? (1)
- (b) Define the terms meander and floodplain. (2)
- (c) Suggest three ways in which the river shown in **Photograph B1** could be carrying out erosion. (3)
- (d) Describe the advantages of living near to a river (4)
- (e) Explain how deforestation would affect the water cycle. (4)
- (f) For a named area that you have studied, explain the causes of flooding. (6)

(Total marks for question B1 = **20 marks**)



## Question B2 (Applied Human Geography)

DO NOT answer this question if you have just answered B1.

1. Study **Graph B2**, which shows the tourist arrivals to Nepal in 2017 and 2018 from 3 countries in thousands.



- (a) Define the term tourism. (1)
- (b) How many more tourists entered Nepal from India in 2018 than in 2017? (1)
- (c) What is common about the change between 2017 and 2018 from all 5 countries (1)
- (d) Give an example of each of the following:
- (i) Primary employment
  - (ii) Secondary employment
  - (iii) Tertiary employment (3)
- (f) Describe the reasons that determine the location of economic activities. (4)
- (g) Explain how transport routes linking settlements and industry can affect quality of life. (4)
- (g) For a named area that you have studied, explain the benefits and problems of an economic activity that takes place. (6)

(Total marks for question B2 = 20 marks)

## Section C: Essays

Choose only ONE question from this section.

**Credit will be given for appropriate use of diagrams/examples.**

**All questions are marked out of 20 marks.**

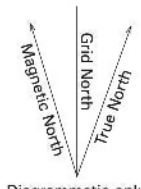
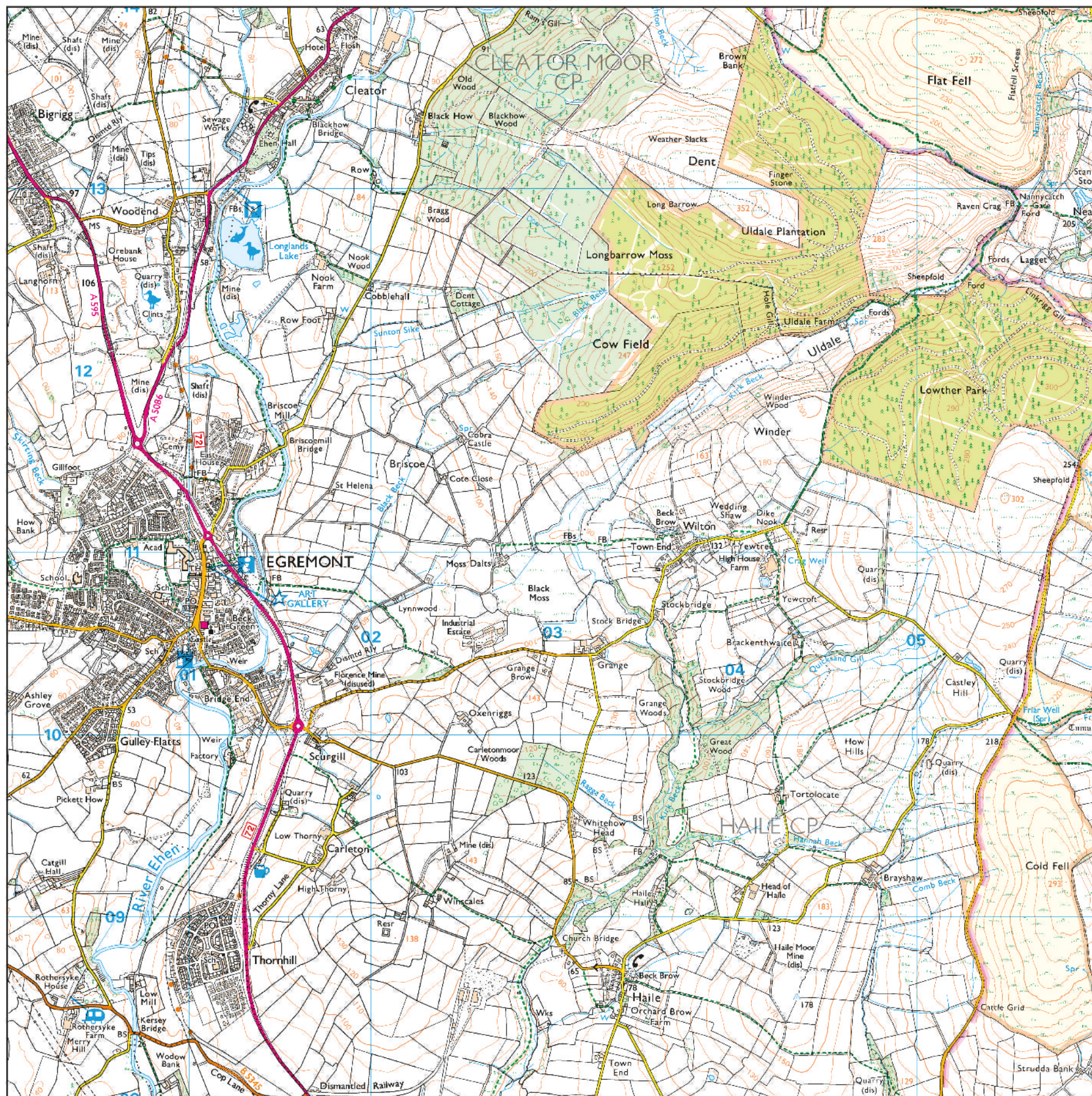
1. Describe the main factors which influence and determine Britain's climate.
2. Discuss the impact of an earthquake that you have studied and how people tried to deal with and manage the aftermath.
3. With reference to the management of an urban development that you have studied, describe and explain how it has been developed in an environmentally sensitive way.
4. Describe and explain the reasons for two settlements being at different positions in a settlement hierarchy.
5. Describe and explain the advantages and disadvantages of transporting people and goods by road, rail, sea and air.
6. Describe and explain the influence of aspect, shelter, buildings, surface and natural features on microclimates.

(Total marks for Section C= **20 marks**)



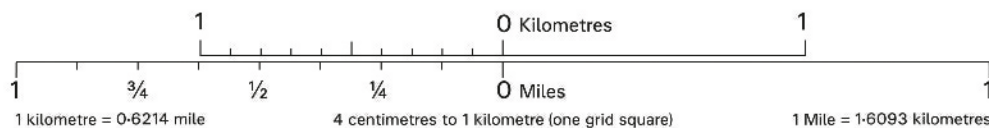


Four colours should appear above; if not then please return to the invigilator.  
Four colours should appear above; if not then please return to the invigilator.



Diagrammatic only

Scale 1: 25 000







# Geography Academic Scholarship 2019

## One page answer sheet

Table A2

Spending by tourists	Percentage of the total spending
before arrival in the islands	64
travelling around the islands by boat	30
on services in ports on the islands	6

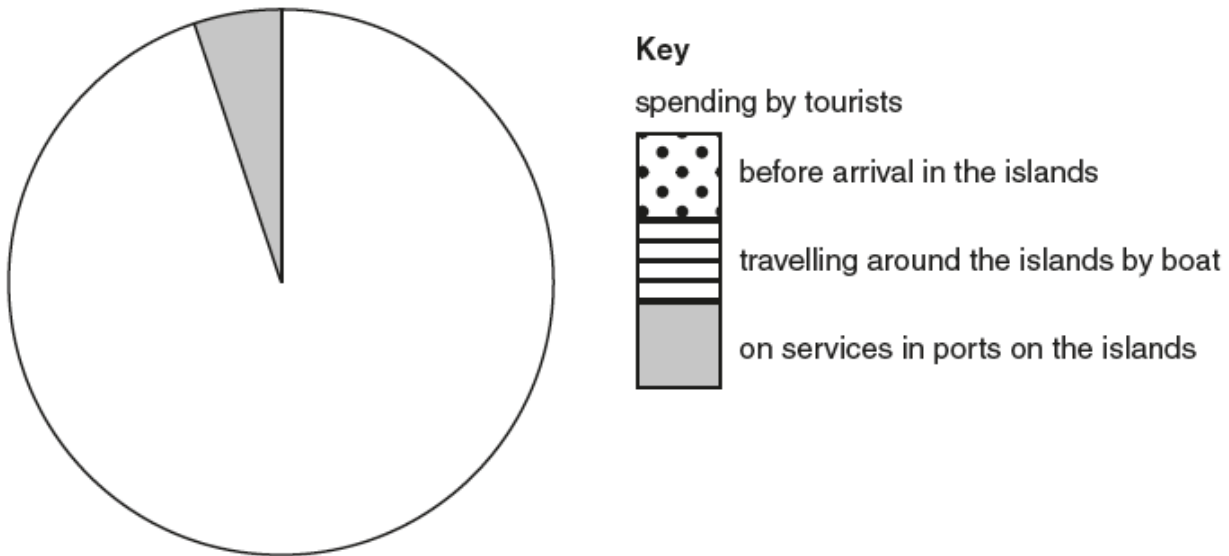


Figure A2